








Addition and Subtraction problems 

Read through each problem. Underline the key words and numbers, then write the correct number sentence and solve it.

<p>There are 6 aliens on the spaceship. 5 more drop by. How many are there altogether?</p> 	
<p>There are 6 aliens on the ship. 4 aliens leave. How many are left?</p> 	
<p>There are 9 aliens in the ship. They pick up 5 more aliens. How many are on the ship now?</p> 	
<p>There are 9 rockets on the planet. 4 rockets fly away. How many are there left?</p> 	
<p>There are 7 rockets on the planet. 4 fly away. How many are left?</p> 	
<p>There are 8 rockets on the planet. 6 more join them. How many are there now?</p> 	
<p>There are 6 ducks on the pond. 7 more ducks come. How many are there altogether?</p> 	
<p>There are 10 cakes on the plate. I eat 5. How many are left?</p> 