









Addition and Subtraction problems



Read through each problem. Underline the key words and numbers, then write the correct number sentence and solve it.

<p>There are 5 cakes on the plate. I eat 1. How many are left?</p> 	
<p>There are 3 aliens on the spaceship. 2 more drop by. How many are there altogether?</p> 	
<p>There are 4 aliens on the ship. 1 alien leaves. How many are left?</p> 	
<p>There are 5 aliens in the ship. They pick up 2 more aliens. How many are on the ship now?</p> 	
<p>There are 6 rockets on the planet. 3 rockets fly away. How many are there left?</p> 	
<p>There are 4 rockets on the planet. 4 fly away. How many are left?</p> 	
<p>There are 3 rockets on the planet. 4 more join them. How many are there now?</p> 	
<p>There are 6 ducks on the pond. 3 more ducks come. How many are there altogether?</p> 	
<p>There are 7 cakes on the plate. I eat 3. How many are left?</p> 