








**Addition and Subtraction problems** ■

Read through each problem. Underline the key words and numbers, then write the correct number sentence and solve it.

|  |  |
|--|--|
| <p>There are 6 aliens on the spaceship. 5 more drop by. How many are there altogether?</p>         |  |
| <p>There are 6 aliens on the ship. 4 aliens leave. How many are left?</p>                          |  |
| <p>There are 9 aliens in the ship. They pick up 5 more aliens. How many are on the ship now?</p>  |  |
| <p>There are 9 rockets on the planet. 4 rockets fly away. How many are there left?</p>           |  |
| <p>There are 7 rockets on the planet. 4 fly away. How many are left?</p>                         |  |
| <p>There are 8 rockets on the planet. 6 more join them. How many are there now?</p>              |  |
| <p>There are 6 ducks on the pond. 7 more ducks come. How many are there altogether?</p>          |  |