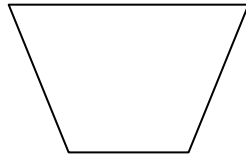
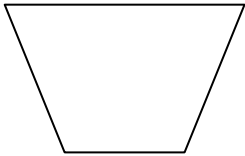


Division

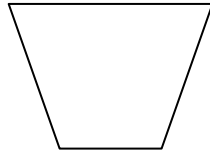
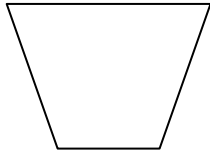
This week we have been learning to share equally and complete division number sentences. Can you share the objects equally and write the division number sentences.

1. I have 10 apples and 2 bowls. I put the same number in each bowl. How many in each bowl? Draw your answer and record as number sentence.

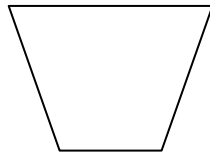
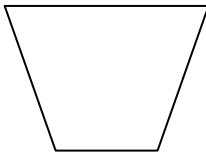


$10 \div 2 =$

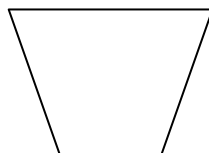
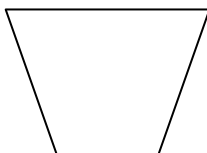
2. I have 8 seeds and 2 pots. I put the same number in each pot. How many in each pot? Draw your answer and record as number sentence.



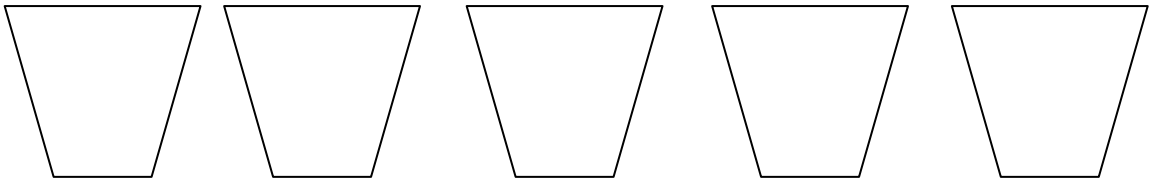

3. I have 14 balls and 2 buckets. I put the same number in each bucket. How many in each pot? Draw your answer and record as number sentence.



4. You have 12 oranges and 2 pots. I put the same number in each pot. How many in each pot? Draw your answer and record as number sentence.

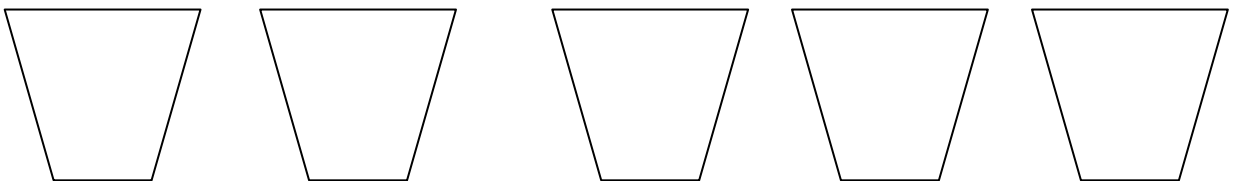



5. I have 15 sweets and 5 buckets. I put the same number in each bucket.
How many in each pot? Draw your answer and record as number sentence.



$$15 \div 5 =$$

6. You have 20 oranges and 5 pots. I put the same number in each pot. How many in each pot? Draw your answer and record as number sentence.



$$\square$$