


## Division

This week we have been learning to share equally and complete division number sentences. Can you share the objects equally and write the division number sentences.

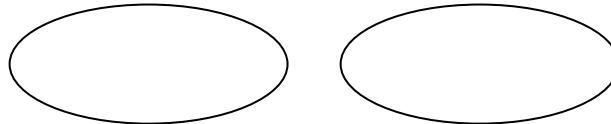
1. Divide these 20 sweets into 5 equal groups:



$20 \div 5 =$





2. Divide these 12 bananas into 2 equal groups:



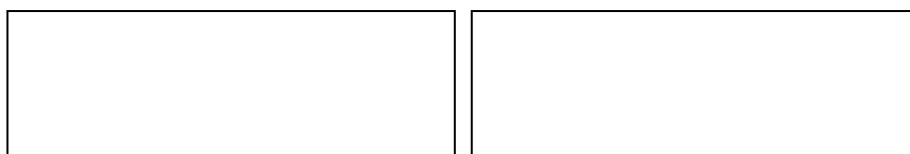

3. Divide these 30 cakes into 10 equal groups:



4. Divide these cherries into 25 equal groups:



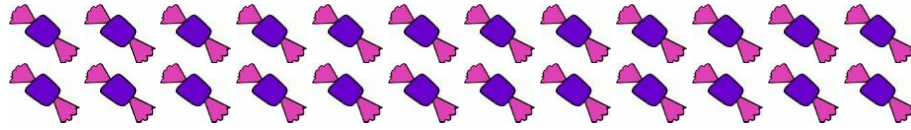
5. Divide these 16 sandwiches into 2 equal groups:




6. There are 30 children in Rainbow class. The children get into 2 equal teams for mini-olympics. How many children are in each team?

---

7. Divide these 24 sweets into 4 equal groups:



8. Divide these 24 cherries into 3 equal groups:



9. Emma has 15 chocolate bars. She decides to share them equally between 5 friends. How many chocolate bars does each friend get?

---