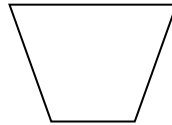
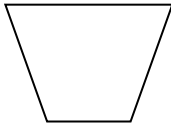



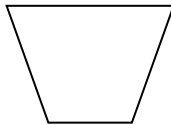
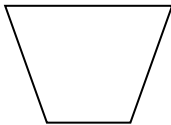

Division

1. There are 10 apples to be shared equally between 2 children.
How many apples will they each have?



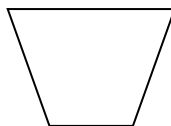
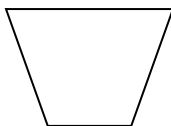
_____ each

2. There are 4 toys to be shared equally between 2 children. How many toys will they each have?



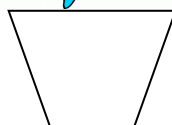
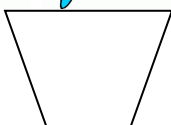
_____ each

3. There are 8 pencils to be shared equally between 2 children.
How many pencils will they each have?



_____ each

4. There are 6 sweets to be shared equally between 2 children.
How many sweets will they each have?



_____ each